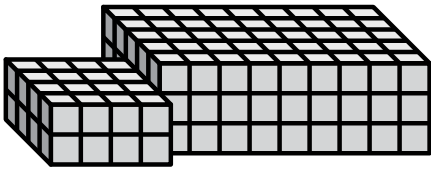





Find the total volume of each figure. Measurement is in cm (not to scale).

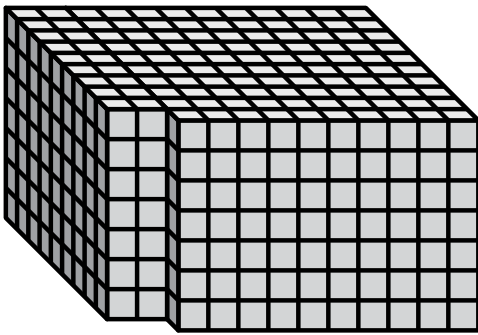
1)



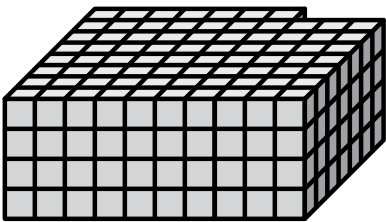
2)



3)



4)



Answers

1. _____

2. _____

3. _____

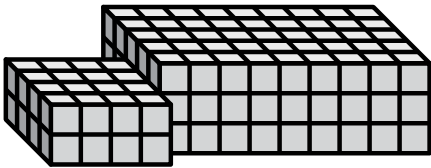
4. _____

5. _____



Find the total volume of each figure. Measurement is in cm (not to scale).


1)



$$9 \times 3 \times 5 = 135$$

$$4 \times 2 \times 4 = 32$$

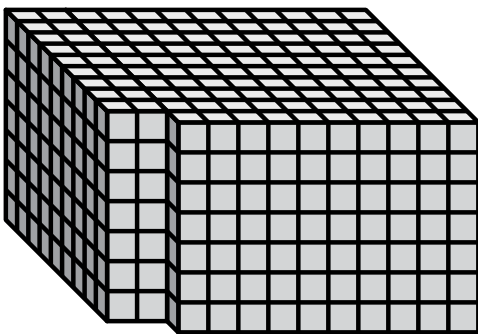
2)



$$10 \times 2 \times 4 = 80$$

$$8 \times 2 \times 3 = 48$$

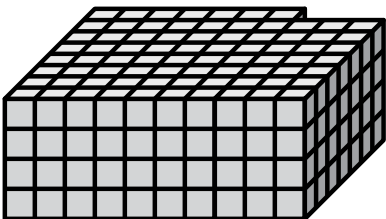
3)



$$10 \times 7 \times 10 = 700$$

$$2 \times 7 \times 9 = 126$$

4)



$$7 \times 4 \times 8 = 224$$

$$3 \times 4 \times 7 = 84$$

Answers

1. 167 cm³

2. 128 cm³

3. 826 cm³

4. 308 cm³

5. 36 cm³